

No.13

3年組 番号前()

- ① 25 + 34 ② 10 + 58 ③ 43 + 98 ④ 6 + 47

+		

+		

+		

- ⑤ 68 - 23 ⑥ 96 - 92 ⑦ 64 - 37 ⑧ 106 - 49

-		

-		

-		

-			

⑨ 4 × 7 =

⑩ 8 × 6 =

⑪ × 6 = 18

⑫ 9 × = 36

⑬ 7 × = 6 × 7

⑭ 2 × 7 = 7 ×

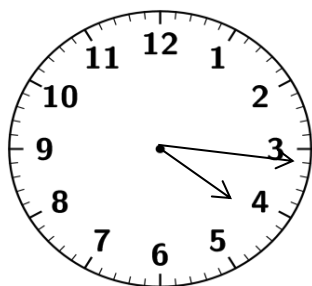
⑮ 3 × 4 = 3 × 3 +

⑯ 5 × 5 + = 5 × 6

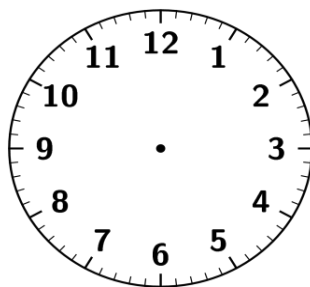
⑰ 7 × 6 = 7 × 7 -

⑱ 8 × 4 = 8 × 5 -

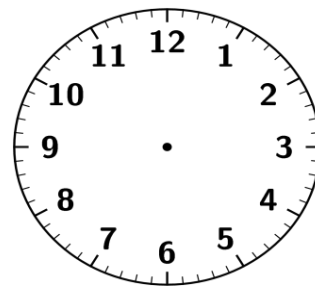
つぎの時こくを読んだり 時こくのどけいの はりを 書いたりしなさい。



2時30分



7時15分



No.14

3年組 番名前()

① $5 + 30$

+		
<hr/>		

② $47 + 25$

+		
<hr/>		

③ $56 + 68$

+		
<hr/>		

④ $546 + 84$

+		
<hr/>		

⑤ $74 - 23$

-		
<hr/>		

⑥ $81 - 53$

-		
<hr/>		

⑦ $67 - 39$

-		
<hr/>		

⑧ $104 - 77$

-		
<hr/>		

⑨ $4 \times 7 = \square$

⑩ $6 \times 9 = \square$

⑪ $\square \times 9 = 72$

⑫ $4 \times \square = 32$

⑬ $8 \times \square = 4 \times 8$

⑭ $6 \times 7 = 7 \times \square$

⑮ $4 \times 8 = 4 \times 7 + \square$

⑯ $8 \times 7 = 8 \times 6 + \square$

⑰ $2 \times 5 = 2 \times 6 - \square$

⑱ $5 \times 6 = 5 \times 7 - \square$

\square に あう 数を 書きましよう。

① $1 \text{ m} = \square \text{ cm}$

② $200 \text{ cm} = \square \text{ m}$

③ $3 \text{ m } 65 \text{ cm} = \square \text{ cm}$

④ $825 \text{ cm} = \square \text{ m } \square \text{ cm}$

3年組 番名前()

- ① $63 + 25$ ② $40 + 27$ ③ $69 + 96$ ④ $96 + 8$

+		

+		

+		

+		

- ⑤ $67 - 23$ ⑥ $55 - 52$ ⑦ $73 - 48$ ⑧ $219 - 57$

-		

-		

-		

-			

⑧ $6 \times 4 = \square$

⑨ $7 \times 9 = \square$

⑩ $\square \times 5 = 40$

⑪ $6 \times \square = 42$

⑫ $6 \times \square = 8 \times \square$

⑬ $8 \times 3 = 3 \times \square$

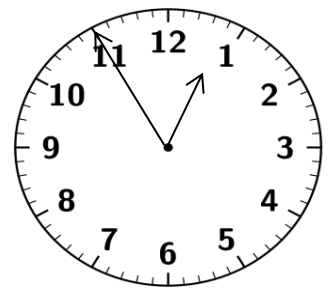
⑭ $7 \times 4 = 7 \times 3 + \square$

⑮ $5 \times 5 + \square = 5 \times 6$

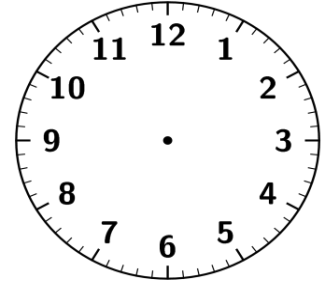
⑯ $2 \times 7 = 2 \times 8 - \square$

⑰ $9 \times 3 = 9 \times 4 - \square$

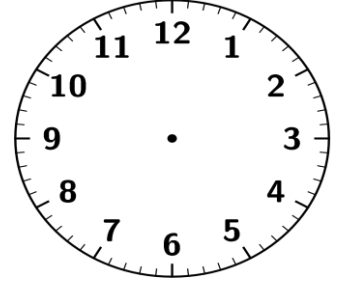
つぎの時こくを読んだり 時こくのとけいの はりを 書いたりしなさい。



8時45分



11時20分



No.16

3年組 番名前()

① $7 + 50$

+		
<hr/>		

② $76 + 88$

+		
<hr/>		

③ $56 + 85$

+		
<hr/>		

④ $39 + 174$

+			
<hr/>			

⑤ $69 - 41$

-		
<hr/>		

⑥ $70 - 38$

-		
<hr/>		

⑦ $45 - 29$

-		
<hr/>		

⑧ $614 - 186$

-			
<hr/>			

⑨ $7 \times 6 = \square$

⑩ $6 \times 8 = \square$

⑪ $\square \times 3 = 27$

⑫ $5 \times \square = 45$

⑬ $\square \times 9 = 9 \times \square$

⑭ $7 \times \square = 9 \times 7$

⑮ $5 \times 6 = 5 \times 5 + \square$

⑯ $4 \times 7 = 4 \times 6 + \square$

⑰ $7 \times 6 = 7 \times 7 - \square$

⑱ $3 \times 8 = 3 \times 9 - \square$

\square に あう 数を 書きましよう。

① $100 \text{ cm} = \square \text{ m}$

② $5 \text{ m} = \square \text{ cm}$

③ $7 \text{ m } 14 \text{ cm} = \square \text{ cm}$

④ $407 \text{ m} = \square \text{ m } \square \text{ cm}$

